

# Shape × Shape

Stage:2






































The coloured shapes stand for eleven of the numbers from 0 to 12. Each shape is a different number.

Can you work out what they are from the multiplications below?

Cam 2

Mae'r siapiau lliwgar yn darlunio unarddeg o'r rifau rhwng 0 a 12. Mae pob un siap yn rhif gwahanol.

Allwch chi diddwytho pa rhif maen nhw drwy ddefnyddio'r lluosuadau yma?

 ×  ×  = 	 ×  = 
 ×  = 	 ×  = 
 ×  = 	 ×  = 
 ×  = 	 ×  = 
 ×  = 	 ×  = 
 ×  = 	 ×  = 

# Siap × Siap